

St. Andrews Scots Sr. Sec.School

9th Avenue, I.P Extension, Patparganj, Delhi-110092

Session- 2024-2025






Class:II

Subject:Maths

Topic: Data Handling

Revision Worksheet-5

Q. A teacher made the list of children to find out which vegetables they liked or disliked the most.

Vegetables	No. of children
 Tomato	14
 Capsicum	25
 Carrot	38
 Mushroom	20
 Potato	45

Q1. Which vegetable the children liked the most?

Ans. _____

Q2. How many children liked carrot?

Ans. _____

Q3. Which vegetable is least liked by the children?

Ans. _____